






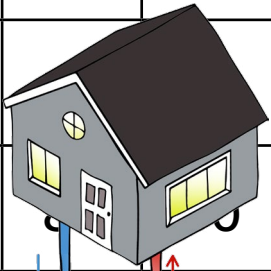



Kva tal skjuler seg bak figurane?

	2	3	4	5	6	7	8	9	
	12	13	14	15	16	17	18	19	
21	22	23	24	25	26		28	29	30
31	32	33	34	35	36		38	39	40
41	42	43	44		46	47	48	49	50
51	52	53	54		56	57	58	59	60
	62	63	64	65	66	67	68	69	70
	73	74	75	76	77	78			
81	82	83	84			87	88		
91	92	93	94	95	96	97	98	99	100



--	--	--



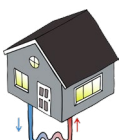
--	--



--	--	--	--



--	--



--	--	--	--



--	--	--	--